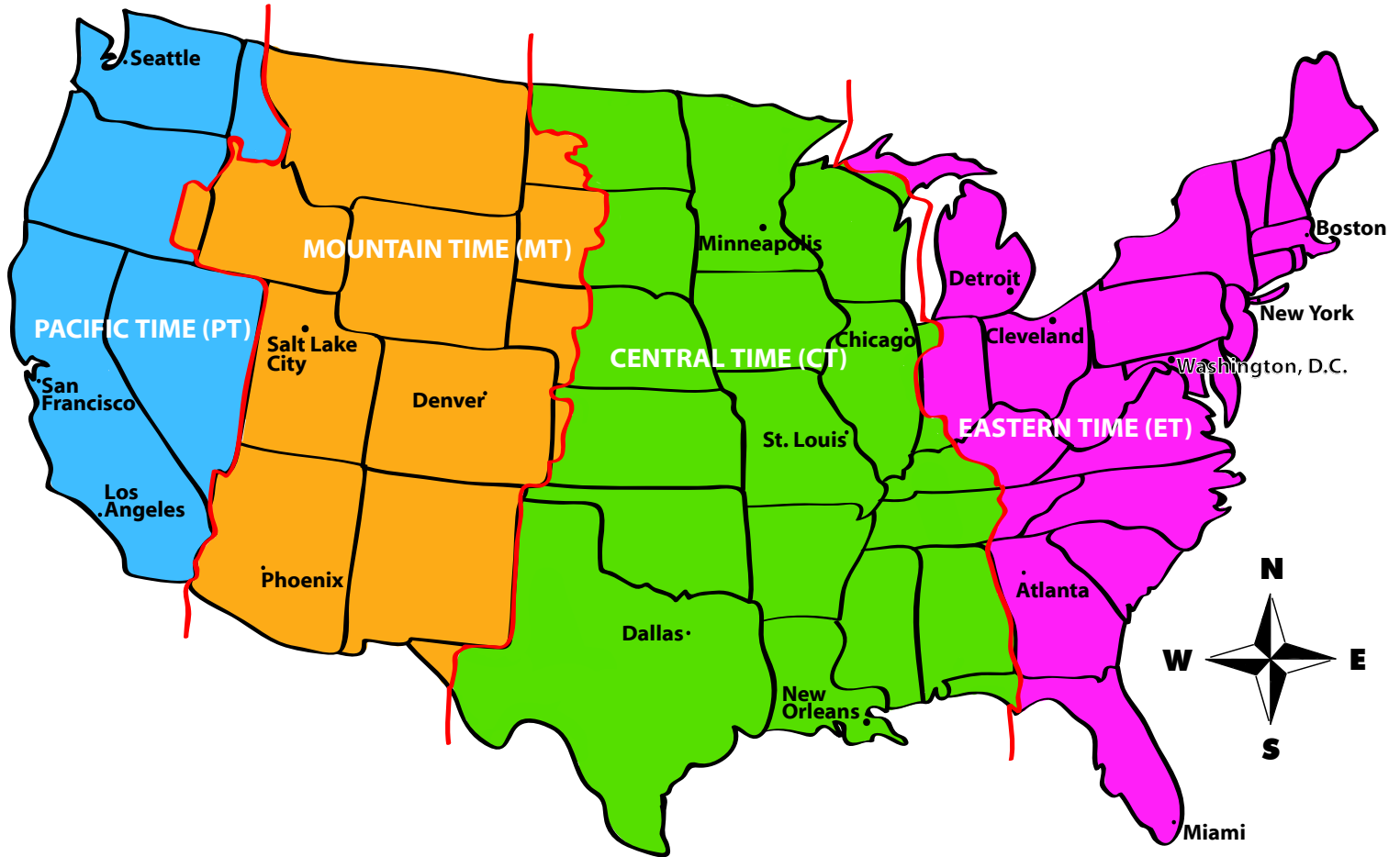


USA Time Zones

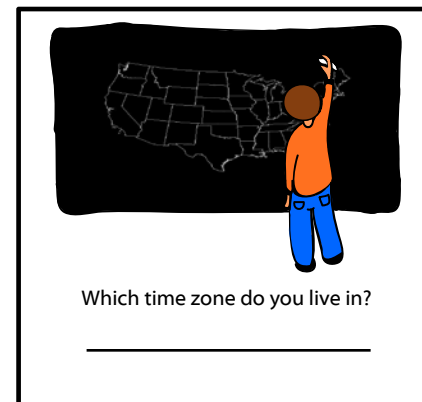
Different regions of the world have different times. Each time zone is separated by one hour. If it's 1:00 in the Pacific Time Zone, it's 2:00 in the Mountain Time Zone, it's 3:00 in the Central Time Zone, and it's 4:00 in the Atlantic Time Zone.



Example: If it is 8:00 am in Chicago, what time is it in Seattle?

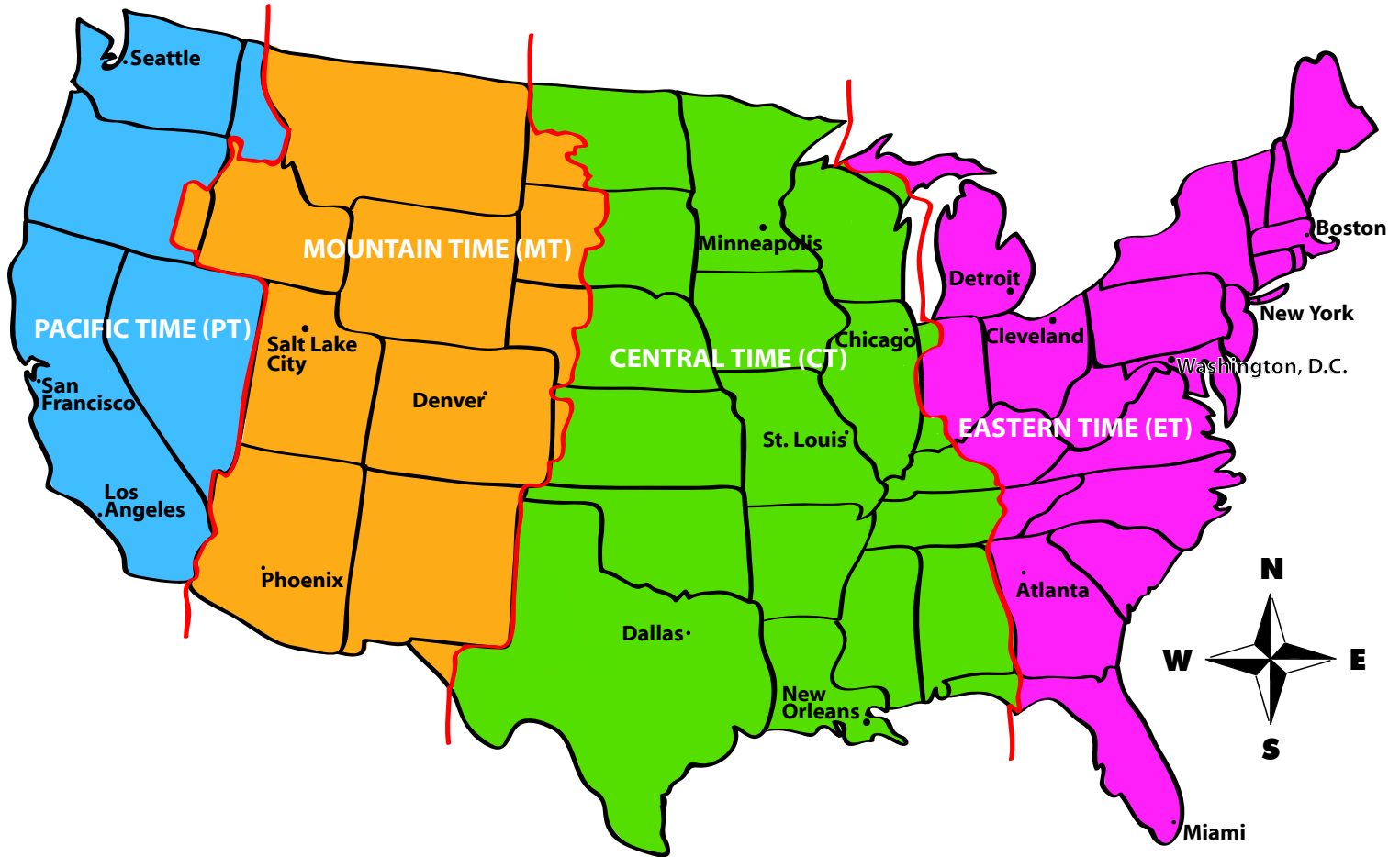
Answer: 6:00 pm

- 1) If it is 5:00 am in Chicago, what time is it in Seattle?
- 2) If it is 9:30 pm in San Francisco, what is it in Atlanta?
- 3) Imagine you're in New Orleans, and your friend in Denver asked you to call her at 4:00 pm Mountain time. What time will it be in New Orleans when you call?
- 4) Pretend you're flying from Cleveland to Phoenix. It's a four-hour flight, and you leave at 8:00 am. What time will it be in Phoenix when you land?
- 5) If you flew from Los Angeles to Boston on a six-hour flight, and you leave at 7:30 pm, what time will it be in Boston when you land?
- 6) A train ride from Atlanta to Dallas is 18 hours. If you left Atlanta at 6:00 am, what time will it be when you arrive in Dallas?



USA Time Zones

Different regions of the world have different times. Each time zone is separated by one hour. If it's 1:00 in the Pacific Time Zone, it's 2:00 in the Mountain Time Zone, it's 3:00 in the Central Time Zone, and it's 4:00 in the Atlantic Time Zone.



Example: If it is 8:00 am in Chicago, what time is it in Seattle?

Answer: 6:00 pm

- 1) If it is 5:00 am in Chicago, what time is it in Seattle?
3:00 am
- 2) If it is 9:30 pm in San Francisco, what is it in Atlanta?
12:30 am
- 3) Imagine you're in New Orleans, and your friend in Denver asked you to call her at 4:00 pm Mountain time. What time will it be in New Orleans when you call?
5:00 pm
- 4) Pretend you're flying from Cleveland to Phoenix. It's a four-hour flight, and you leave at 8:00 am. What time will it be in Phoenix when you land?
10:00 am
- 5) If you flew from Los Angeles to Boston on a six-hour flight, and you leave at 7:30 pm, what time will it be in Boston when you land?
4:30 am
- 6) A train ride from Atlanta to Dallas is 18 hours. If you left Atlanta at 6:00 am, what time will it be when you arrive in Dallas?
11:00 pm

